







1 Runde zum näher gelegenen Nachbarhunderter.



2 Runde auf Hunderter.

- | | | | | |
|---------------------------------|------------------------------------|------------------------------------|------------------------------------|------------------------------------|
| a) $351 \approx 400$ | b) $350 \approx \underline{\quad}$ | c) $286 \approx \underline{\quad}$ | d) $530 \approx \underline{\quad}$ | e) $909 \approx \underline{\quad}$ |
| $184 \approx \underline{\quad}$ | $349 \approx \underline{\quad}$ | $268 \approx \underline{\quad}$ | $550 \approx \underline{\quad}$ | $945 \approx \underline{\quad}$ |
| $144 \approx \underline{\quad}$ | $750 \approx \underline{\quad}$ | $446 \approx \underline{\quad}$ | $640 \approx \underline{\quad}$ | $837 \approx \underline{\quad}$ |
| $344 \approx \underline{\quad}$ | $748 \approx \underline{\quad}$ | $464 \approx \underline{\quad}$ | $664 \approx \underline{\quad}$ | $854 \approx \underline{\quad}$ |

3 Runde zum näher gelegenen Nachbarzehner.



4 Runde auf Zehner.

- | | | | | |
|---------------------------------|------------------------------------|------------------------------------|------------------------------------|------------------------------------|
| a) $185 \approx 190$ | b) $213 \approx \underline{\quad}$ | c) $330 \approx \underline{\quad}$ | d) $442 \approx \underline{\quad}$ | e) $536 \approx \underline{\quad}$ |
| $189 \approx \underline{\quad}$ | $215 \approx \underline{\quad}$ | $334 \approx \underline{\quad}$ | $449 \approx \underline{\quad}$ | $539 \approx \underline{\quad}$ |
| $193 \approx \underline{\quad}$ | $284 \approx \underline{\quad}$ | $335 \approx \underline{\quad}$ | $458 \approx \underline{\quad}$ | $577 \approx \underline{\quad}$ |
| $195 \approx \underline{\quad}$ | $204 \approx \underline{\quad}$ | $381 \approx \underline{\quad}$ | $707 \approx \underline{\quad}$ | $994 \approx \underline{\quad}$ |

5 Runde zum näher gelegenen Hunderter. In welches Tor fliegt der Ball?

4 zu 6

