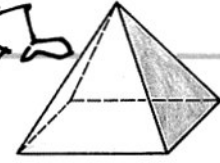
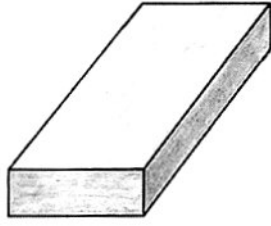

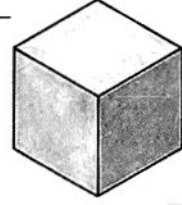


Körper

1 a) Welche Körperformen sind hier abgebildet?



Pyramide



b) Welcher Körper hat ...



keine Kante ? _____

1 Kante ? _____

2 Kanten? _____

8 Kanten? _____

12 Kanten? _____

1 Fläche ? _____

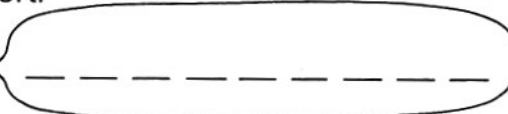
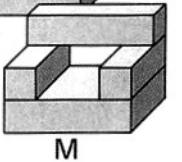
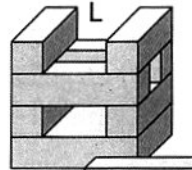
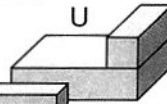
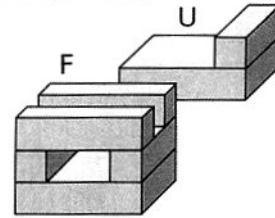
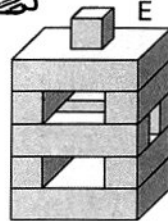

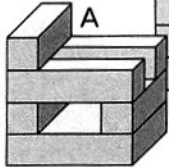
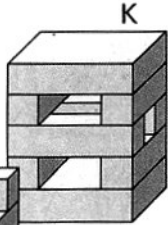
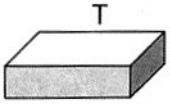
2 Flächen? _____

3 Flächen? _____

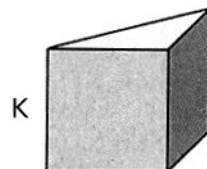
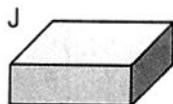
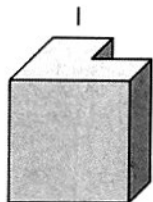
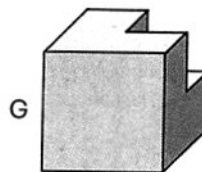
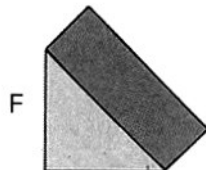
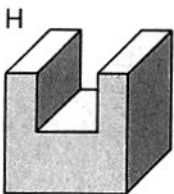
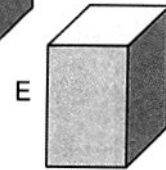
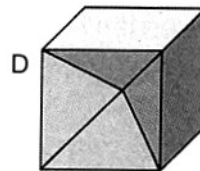
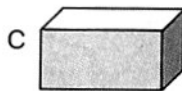
5 Flächen? _____

6 Flächen? _____

2 In welcher Reihenfolge wurde der Turm gebaut? In der richtigen Reihenfolge ergeben die Buchstaben ein Lösungswort.



3 Immer zwei Körper lassen sich zu einem Würfel zusammensetzen. Schreibe auf:



___ und ___

___ und ___

___ und ___

___ und ___

___ und ___

___ und ___