





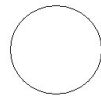
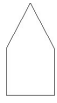
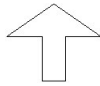


| | | | |
|--------|-------|---------|-----|
| Datum: | Name: | Klasse: | HSU |
|--------|-------|---------|-----|

Jede Form hat ihren Platz

Finde die richtigen Koordinaten und zeichne die Gegenstände dort ein, wo sie hin gehören!

Regel: Gehe **zuerst** nach **rechts** und **dann** nach **oben**!

| | | | | | | | | |
|---|---|---|---|---|---|---|---|---|
| 8 | | | | | | | | |
| 7 | | | | | | | | |
| 6 | | | | | | | | |
| 5 | | | | | | | | |
| 4 | | | | | | | | |
| 3 | | | | | | | | |
| 2 | | | | | | | | |
| 1 | | | | | | | | |
| | 1 | 2 | 3 | 4 | 5 | 6 | 7 | 8 |

| | | | | | |
|----|---|----|---|----|---|
| 1. |  (2 / 7) | 4. |  (5 / 1) | 7. |  (4 / 1) |
| 2. |  (6 / 8) | 5. |  (3 / 5) | 8. |  (5 / 3) |
| 3. |  (1 / 4) | 6. |  (1 / 3) | 9. |  (6 / 6) |