

Rechenmeister, Blatt 1

Bist du ein großer Rechenmeister?

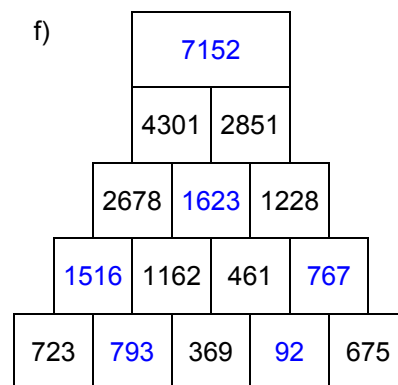
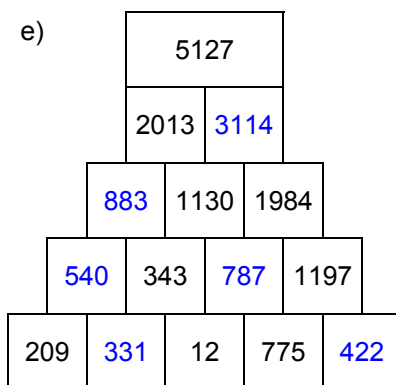
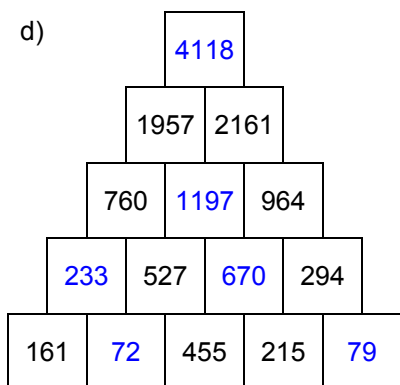
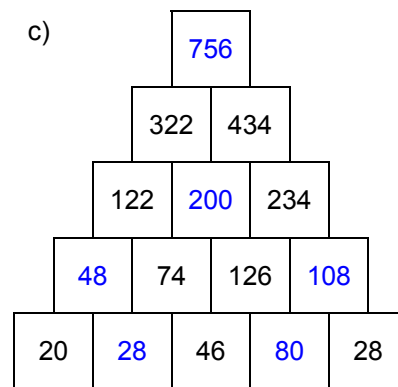
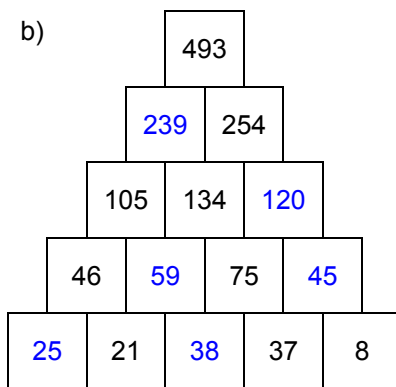
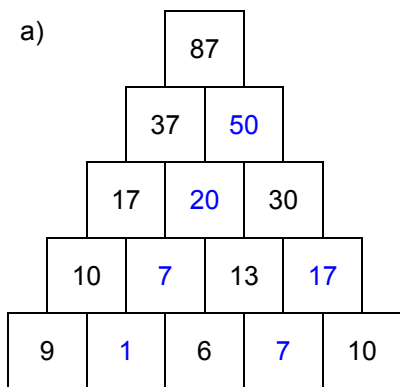
Name: _____, 4a

Datum: _____

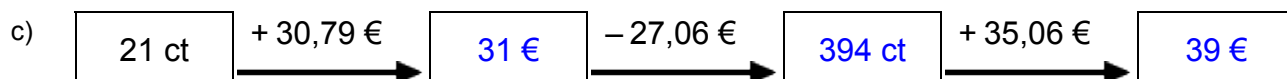
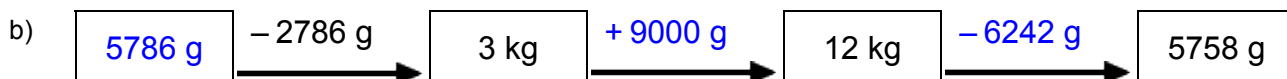
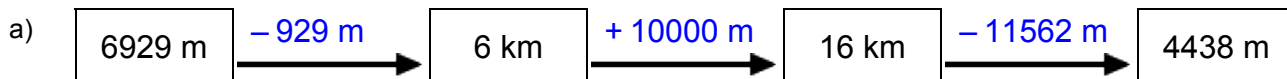
LÖSUNGEN



1. Rechenpyramiden: Immer 2 Steine werden nach oben zum Mittelstein addiert. Ergänze die fehlenden Zahlen!



2. Meter, Kilometer, Gramm, Kilogramm, Euro: Ergänze die fehlenden Werte!



3. Einmaleins: Ergänze die fehlenden Werte!

a)

| | | | | | | |
|---|-----|-----|-----|-----|-----|-----|
| | • 2 | • 5 | • 4 | • 3 | • 6 | • 7 |
| 6 | 12 | 30 | 24 | 18 | 36 | 42 |
| 3 | 6 | 15 | 12 | 9 | 18 | 21 |
| 8 | 16 | 40 | 32 | 24 | 48 | 56 |
| 2 | 4 | 10 | 8 | 6 | 12 | 14 |
| 5 | 10 | 25 | 20 | 15 | 30 | 35 |
| 4 | 8 | 20 | 16 | 12 | 24 | 28 |
| 7 | 14 | 35 | 28 | 21 | 42 | 49 |

b)

| | | | | | | |
|----|-----|-----|-----|-----|-----|-----|
| | • 4 | • 5 | • 7 | • 6 | • 2 | • 3 |
| 13 | 52 | 65 | 91 | 78 | 26 | 39 |
| 15 | 60 | 75 | 105 | 90 | 30 | 45 |
| 14 | 56 | 70 | 98 | 84 | 28 | 42 |
| 17 | 68 | 85 | 119 | 102 | 34 | 51 |
| 11 | 44 | 55 | 77 | 66 | 22 | 33 |
| 12 | 48 | 60 | 84 | 72 | 24 | 36 |
| 16 | 64 | 80 | 112 | 96 | 32 | 48 |

Rechenmeister, Blatt 2

Bist du ein großer Rechenmeister?

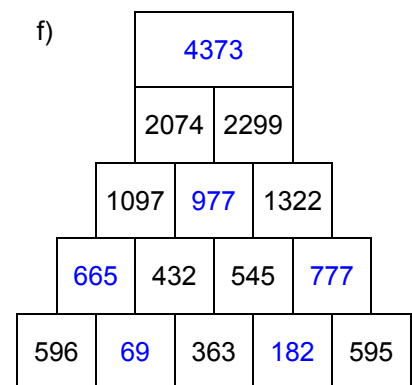
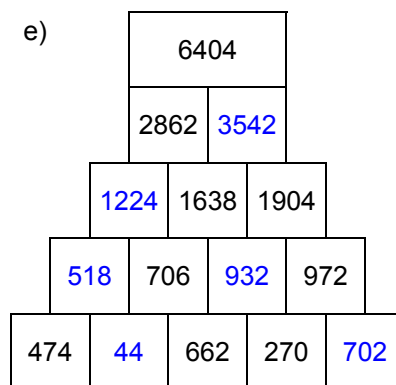
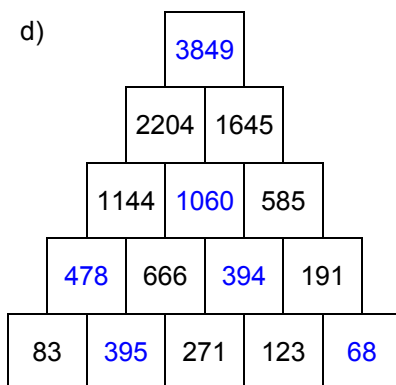
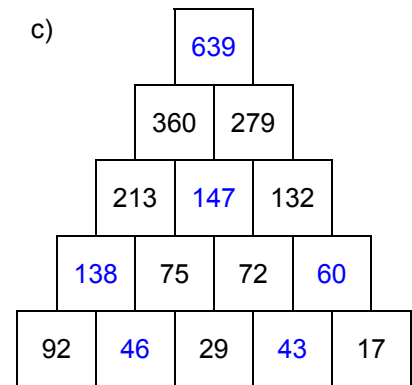
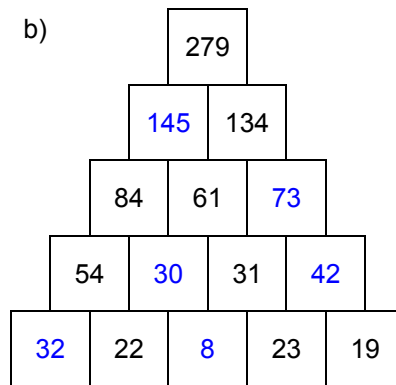
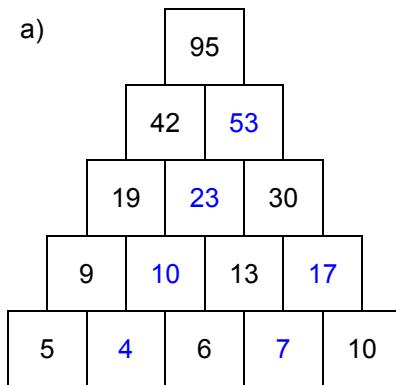
Name: _____, 4a

Datum: _____

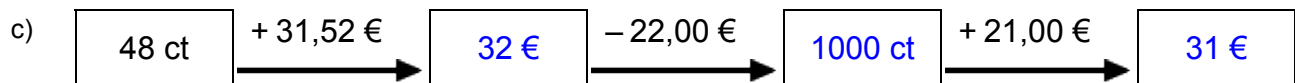
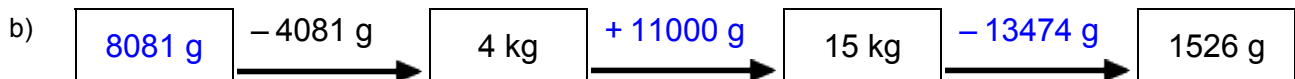
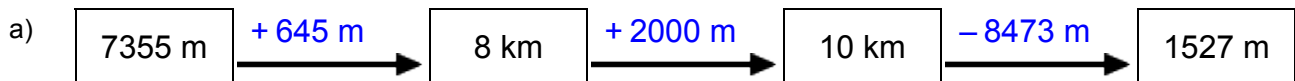
LÖSUNGEN



1. Rechenpyramiden: Immer 2 Steine werden nach oben zum Mittelstein addiert. Ergänze die fehlenden Zahlen!



2. Meter, Kilometer, Gramm, Kilogramm, Euro: Ergänze die fehlenden Werte!



3. Einmaleins: Ergänze die fehlenden Werte!

a)

| | | | | | | |
|---|-----|-----|-----|-----|-----|-----|
| | • 5 | • 4 | • 6 | • 3 | • 7 | • 2 |
| 7 | 35 | 28 | 42 | 21 | 49 | 14 |
| 4 | 20 | 16 | 24 | 12 | 28 | 8 |
| 5 | 25 | 20 | 30 | 15 | 35 | 10 |
| 6 | 30 | 24 | 36 | 18 | 42 | 12 |
| 2 | 10 | 8 | 12 | 6 | 14 | 4 |
| 3 | 15 | 12 | 18 | 9 | 21 | 6 |
| 8 | 40 | 32 | 48 | 24 | 56 | 16 |

b)

| | | | | | | |
|----|-----|-----|-----|-----|-----|-----|
| | • 2 | • 5 | • 7 | • 6 | • 3 | • 4 |
| 17 | 34 | 85 | 119 | 102 | 51 | 68 |
| 13 | 26 | 65 | 91 | 78 | 39 | 52 |
| 15 | 30 | 75 | 105 | 90 | 45 | 60 |
| 14 | 28 | 70 | 98 | 84 | 42 | 56 |
| 16 | 32 | 80 | 112 | 96 | 48 | 64 |
| 11 | 22 | 55 | 77 | 66 | 33 | 44 |
| 12 | 24 | 60 | 84 | 72 | 36 | 48 |