

Rechenmeister, Blatt 3

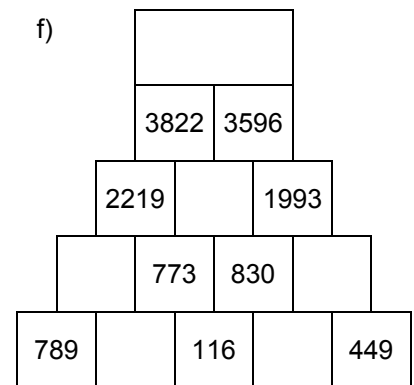
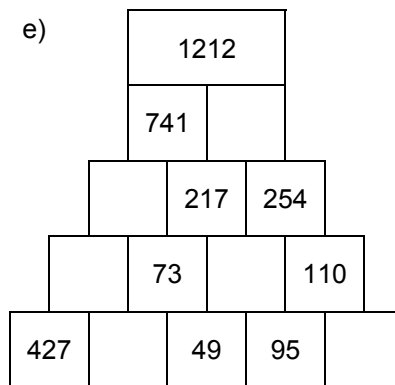
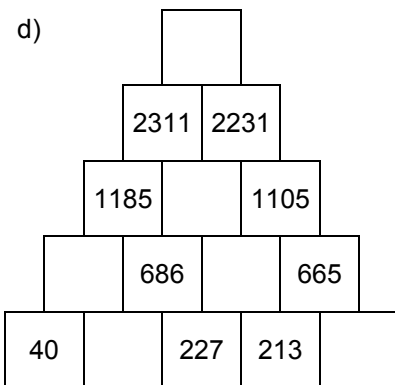
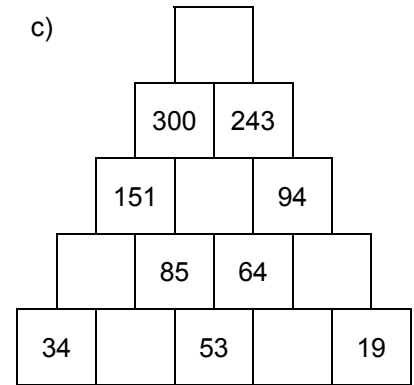
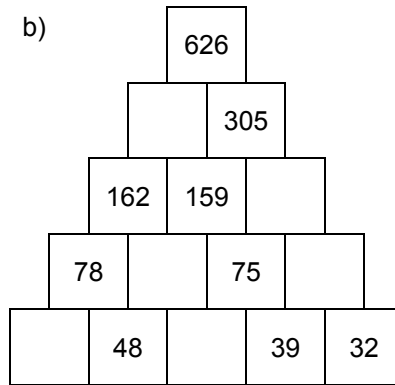
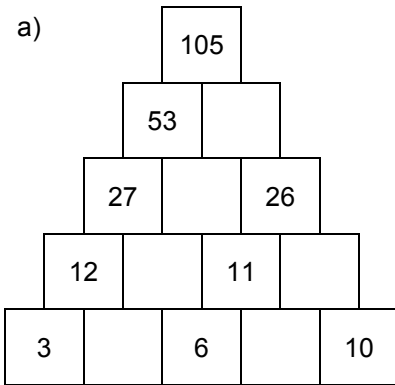
Bist du ein großer Rechenmeister?

Name: _____, 4a

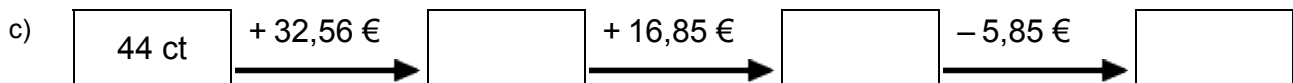
Datum: _____



1. Rechenpyramiden: Immer 2 Steine werden nach oben zum Mittelstein addiert. Ergänze die fehlenden Zahlen!



2. Meter, Kilometer, Gramm, Kilogramm, Euro: Ergänze die fehlenden Werte!



3. Einmaleins: Ergänze die fehlenden Werte!

a)

	• 5	• 2	• 6	• 7	• 3	• 4
2						
7						
4						
3						
8						
5						
6						

b)

	• 2	• 4	• 5	• 3	• 7	• 6
12						
16						
17						
13						
14						
15						
11						

Rechenmeister, Blatt 4

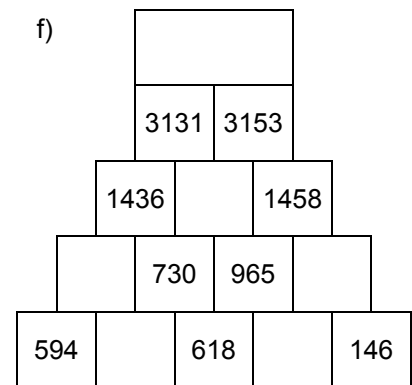
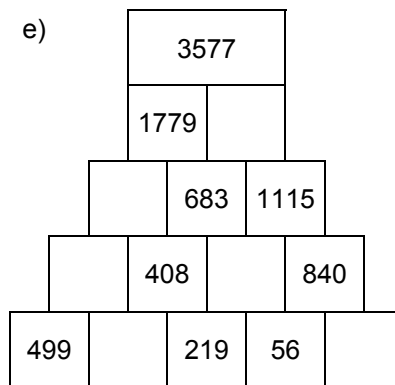
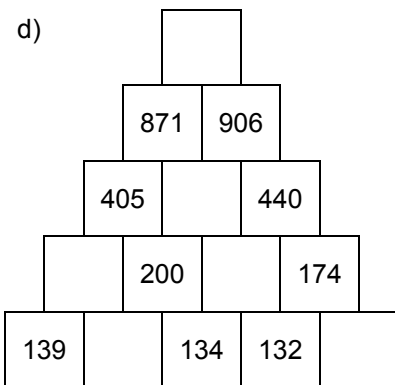
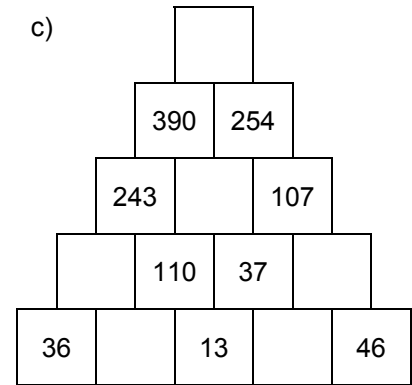
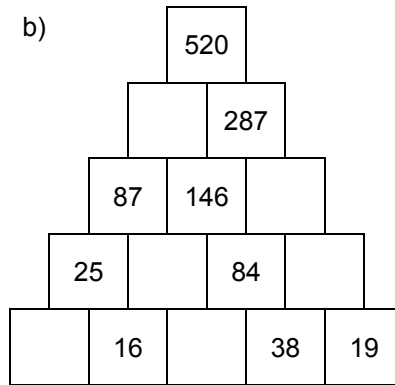
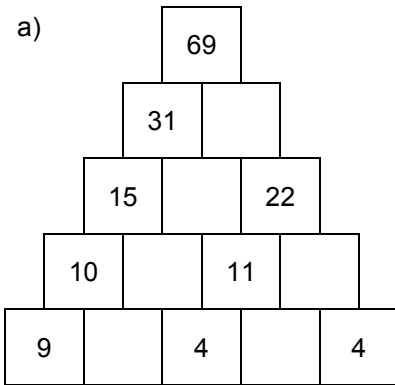
Bist du ein großer Rechenmeister?

Name: _____, 4a

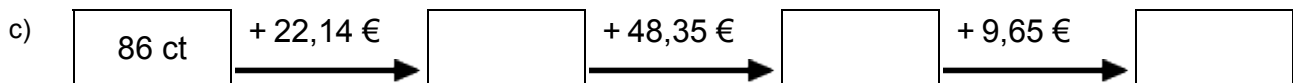
Datum: _____



1. Rechenpyramiden: Immer 2 Steine werden nach oben zum Mittelstein addiert. Ergänze die fehlenden Zahlen!



2. Meter, Kilometer, Gramm, Kilogramm, Euro: Ergänze die fehlenden Werte!



3. Einmaleins: Ergänze die fehlenden Werte!

a)

	• 6	• 3	• 7	• 2	• 5	• 4
2						
7						
4						
6						
8						
5						
3						

b)

	• 4	• 3	• 5	• 6	• 7	• 2
17						
14						
12						
15						
11						
13						
16						