

Rechenmeister, Blatt 5

Bist du ein großer Rechenmeister?

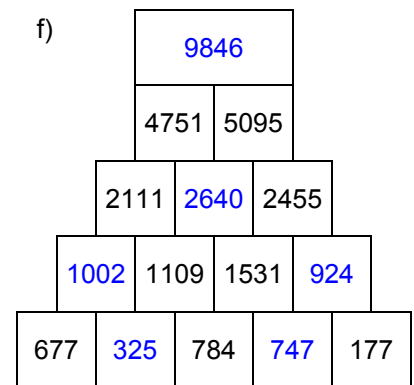
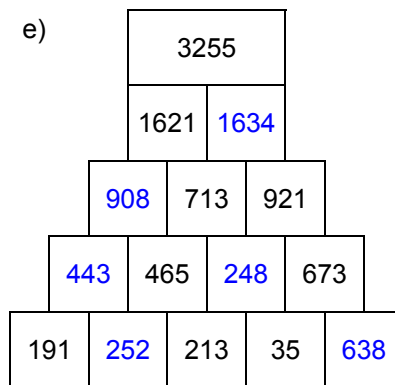
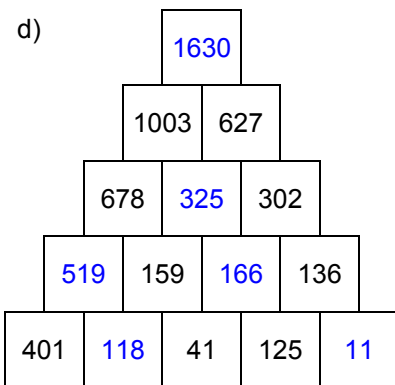
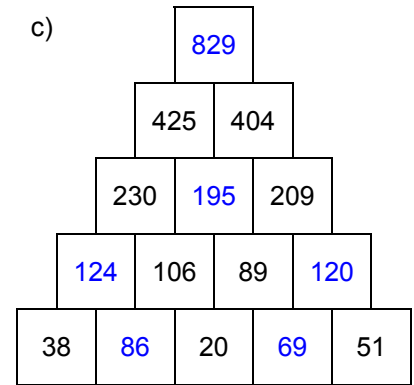
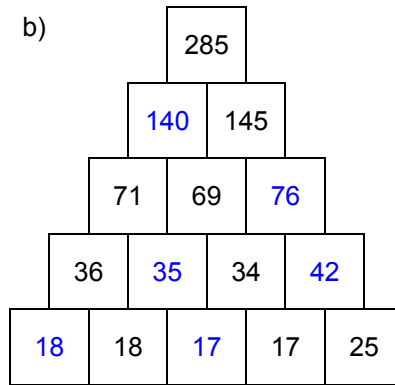
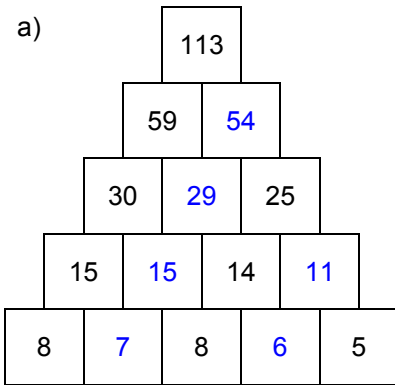
Name: _____, 4a

Datum: _____

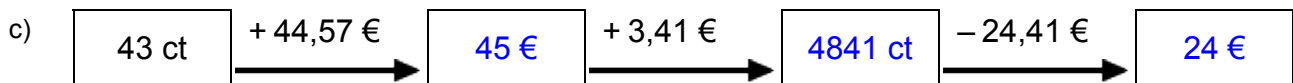
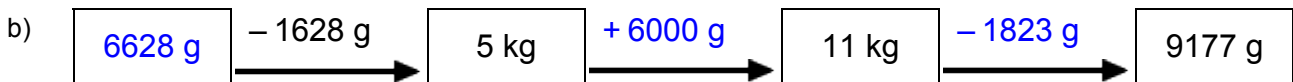
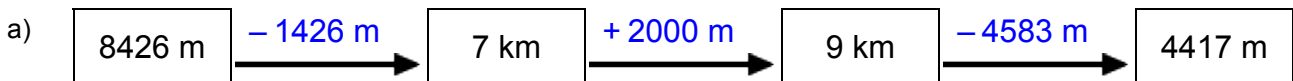
LÖSUNGEN



1. Rechenpyramiden: Immer 2 Steine werden nach oben zum Mittelstein addiert. Ergänze die fehlenden Zahlen!



2. Meter, Kilometer, Gramm, Kilogramm, Euro: Ergänze die fehlenden Werte!



3. Einmaleins: Ergänze die fehlenden Werte!

a)

	• 7	• 6	• 5	• 3	• 4	• 2
3	21	18	15	9	12	6
4	28	24	20	12	16	8
6	42	36	30	18	24	12
5	35	30	25	15	20	10
2	14	12	10	6	8	4
8	56	48	40	24	32	16
7	49	42	35	21	28	14

b)

	• 2	• 4	• 3	• 5	• 6	• 7
16	32	64	48	80	96	112
13	26	52	39	65	78	91
17	34	68	51	85	102	119
12	24	48	36	60	72	84
15	30	60	45	75	90	105
14	28	56	42	70	84	98
11	22	44	33	55	66	77

Rechenmeister, Blatt 6

Bist du ein großer Rechenmeister?

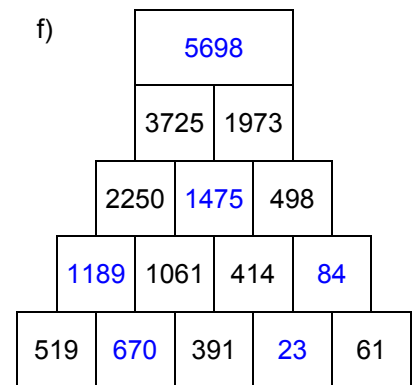
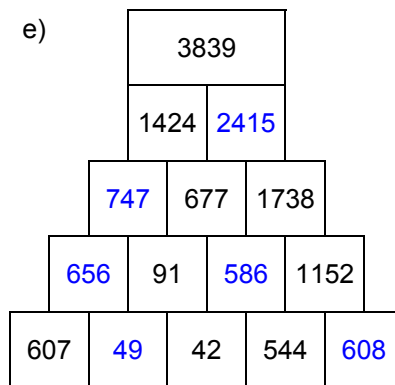
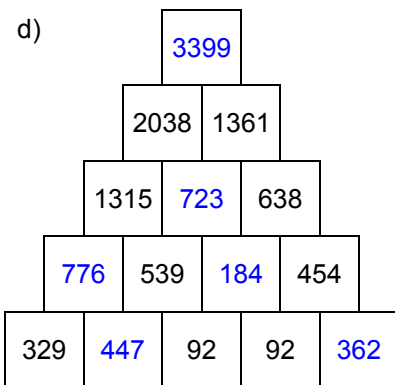
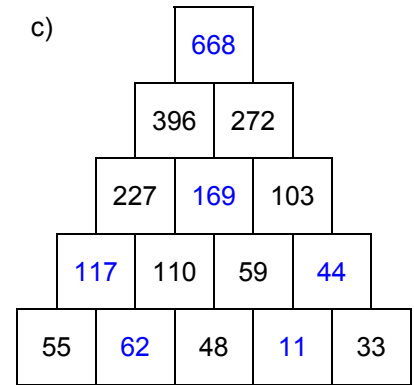
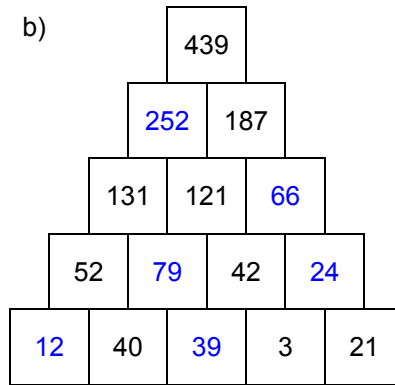
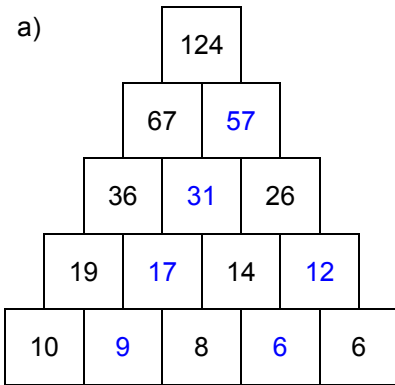
Name: _____, 4a

Datum: _____

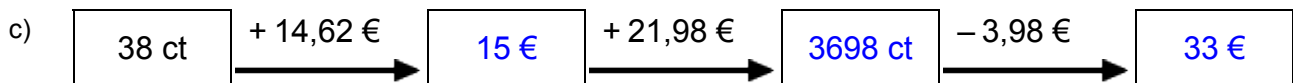
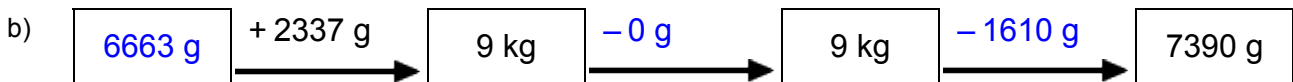
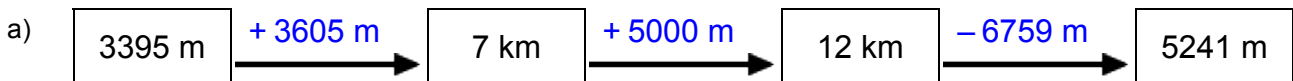
LÖSUNGEN



1. Rechenpyramiden: Immer 2 Steine werden nach oben zum Mittelstein addiert. Ergänze die fehlenden Zahlen!



2. Meter, Kilometer, Gramm, Kilogramm, Euro: Ergänze die fehlenden Werte!



3. Einmaleins: Ergänze die fehlenden Werte!

a)

	• 7	• 3	• 6	• 5	• 4	• 2
7	49	21	42	35	28	14
4	28	12	24	20	16	8
2	14	6	12	10	8	4
6	42	18	36	30	24	12
3	21	9	18	15	12	6
8	56	24	48	40	32	16
5	35	15	30	25	20	10

b)

	• 7	• 5	• 6	• 3	• 4	• 2
16	112	80	96	48	64	32
15	105	75	90	45	60	30
12	84	60	72	36	48	24
11	77	55	66	33	44	22
13	91	65	78	39	52	26
14	98	70	84	42	56	28
17	119	85	102	51	68	34