

Rechenmeister, Blatt 7

Bist du ein großer Rechenmeister?

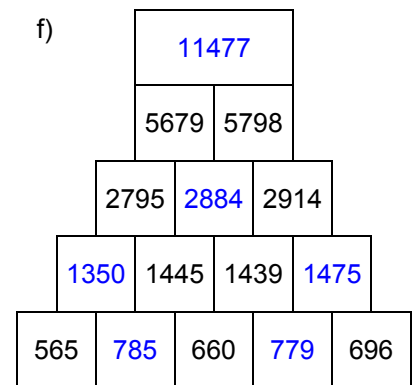
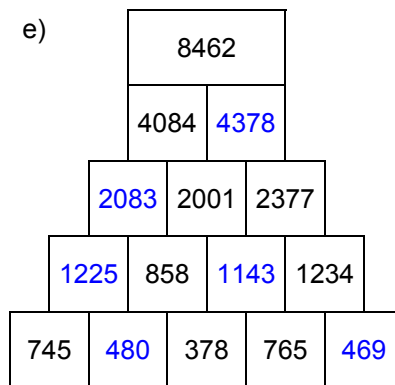
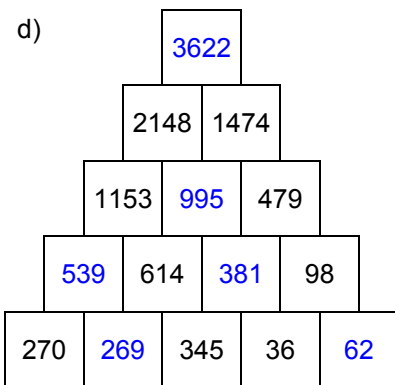
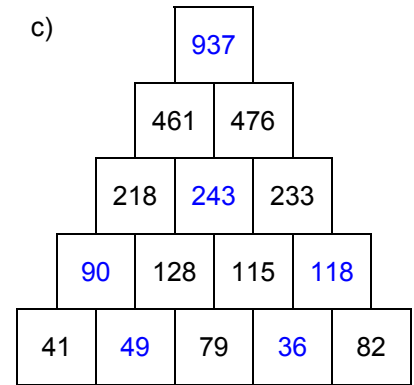
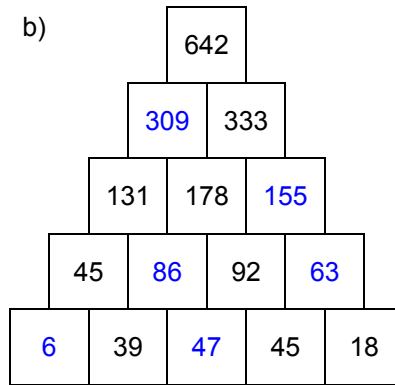
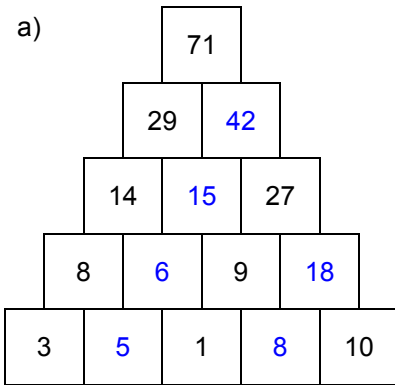
Name: _____, 4a

Datum: _____

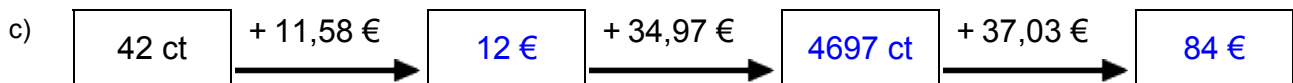
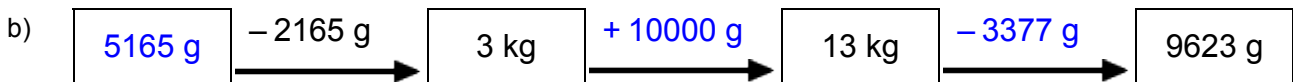
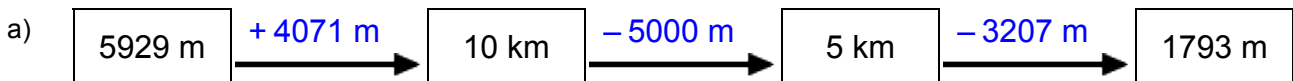
LÖSUNGEN



1. Rechenpyramiden: Immer 2 Steine werden nach oben zum Mittelstein addiert. Ergänze die fehlenden Zahlen!



2. Meter, Kilometer, Gramm, Kilogramm, Euro: Ergänze die fehlenden Werte!



3. Einmaleins: Ergänze die fehlenden Werte!

a)

	• 6	• 4	• 5	• 2	• 7	• 3
2	12	8	10	4	14	6
8	48	32	40	16	56	24
5	30	20	25	10	35	15
3	18	12	15	6	21	9
6	36	24	30	12	42	18
7	42	28	35	14	49	21
4	24	16	20	8	28	12

b)

	• 2	• 4	• 6	• 5	• 7	• 3
17	34	68	102	85	119	51
13	26	52	78	65	91	39
12	24	48	72	60	84	36
16	32	64	96	80	112	48
15	30	60	90	75	105	45
11	22	44	66	55	77	33
14	28	56	84	70	98	42

Rechenmeister, Blatt 8

Bist du ein großer Rechenmeister?

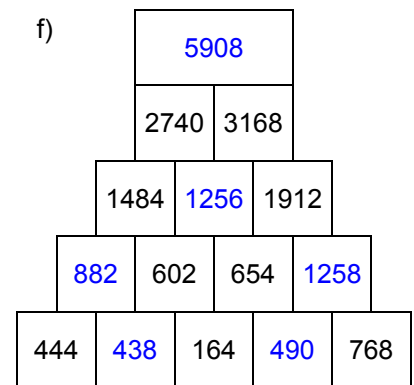
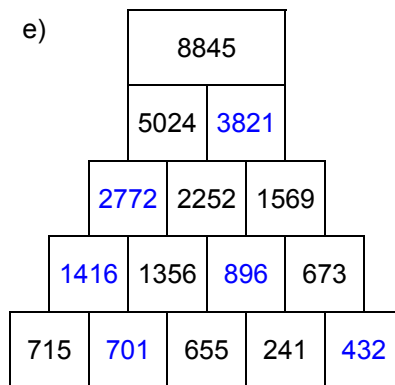
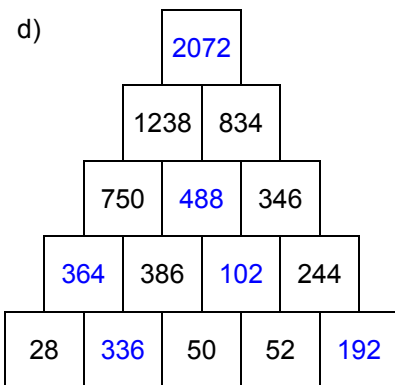
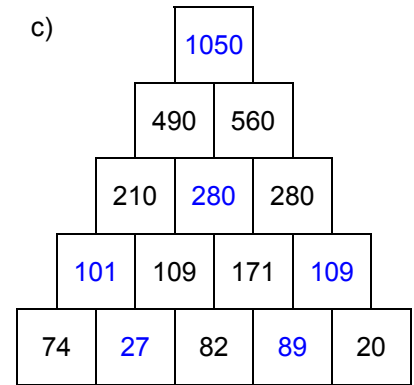
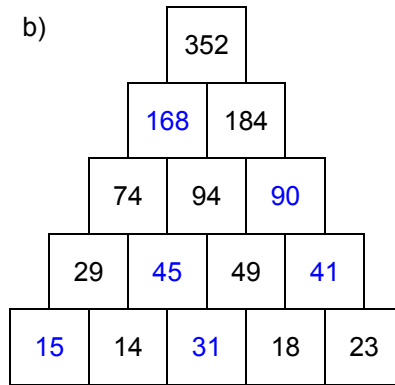
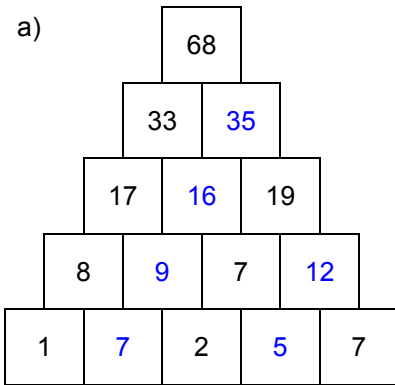
Name: _____, 4a

Datum: _____

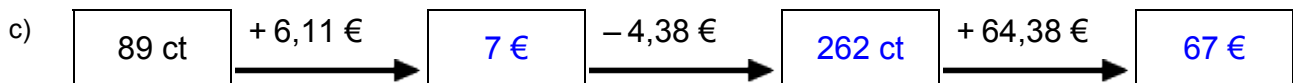
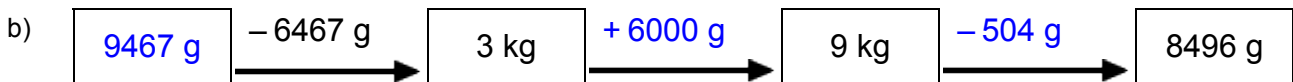
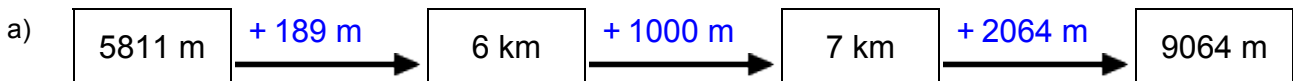
LÖSUNGEN



1. Rechenpyramiden: Immer 2 Steine werden nach oben zum Mittelstein addiert. Ergänze die fehlenden Zahlen!



2. Meter, Kilometer, Gramm, Kilogramm, Euro: Ergänze die fehlenden Werte!



3. Einmaleins: Ergänze die fehlenden Werte!

a)

	• 3	• 5	• 2	• 6	• 7	• 4
8	24	40	16	48	56	32
4	12	20	8	24	28	16
3	9	15	6	18	21	12
2	6	10	4	12	14	8
5	15	25	10	30	35	20
6	18	30	12	36	42	24
7	21	35	14	42	49	28

b)

	• 5	• 6	• 4	• 3	• 2	• 7
14	70	84	56	42	28	98
16	80	96	64	48	32	112
15	75	90	60	45	30	105
11	55	66	44	33	22	77
12	60	72	48	36	24	84
17	85	102	68	51	34	119
13	65	78	52	39	26	91