

# Rechenmeister, Blatt 7

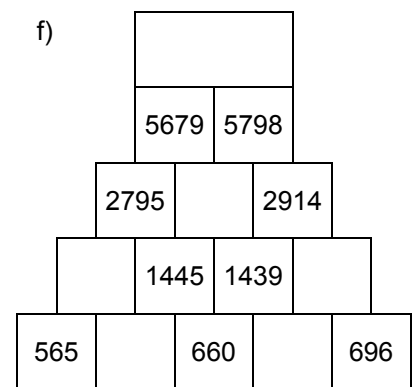
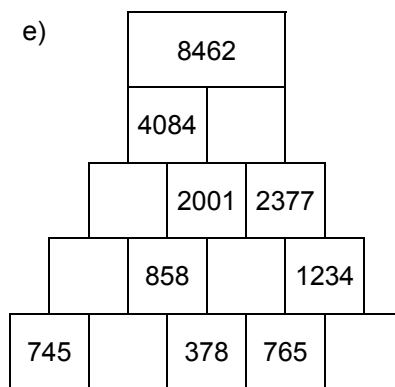
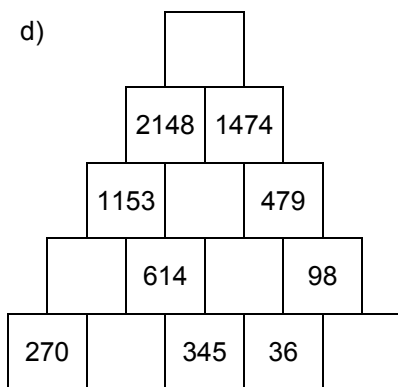
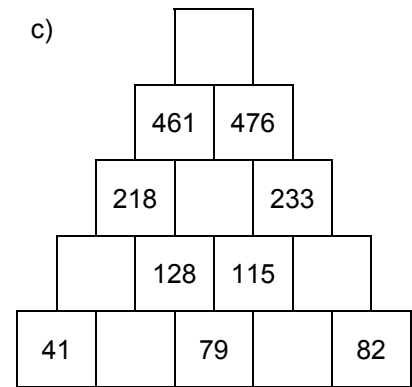
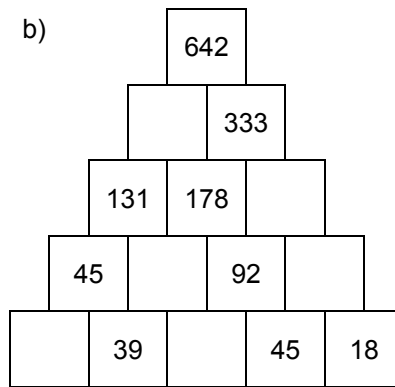
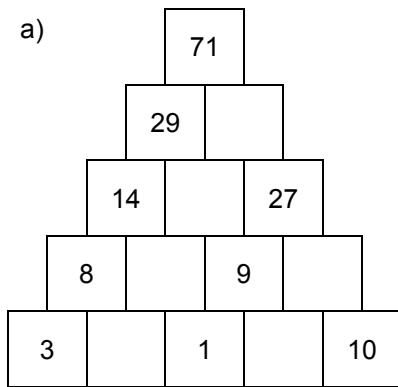
Bist du ein großer Rechenmeister?

Name: \_\_\_\_\_, 4a

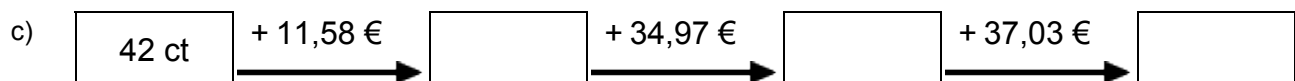
Datum: \_\_\_\_\_



## 1. Rechenpyramiden: Immer 2 Steine werden nach oben zum Mittelstein addiert. Ergänze die fehlenden Zahlen!



## 2. Meter, Kilometer, Gramm, Kilogramm, Euro: Ergänze die fehlenden Werte!



## 3. Einmaleins: Ergänze die fehlenden Werte!

a)

	• 6	• 4	• 5	• 2	• 7	• 3
2						
8						
5						
3						
6						
7						
4						

b)

	• 2	• 4	• 6	• 5	• 7	• 3
17						
13						
12						
16						
15						
11						
14						

# Rechenmeister, Blatt 8

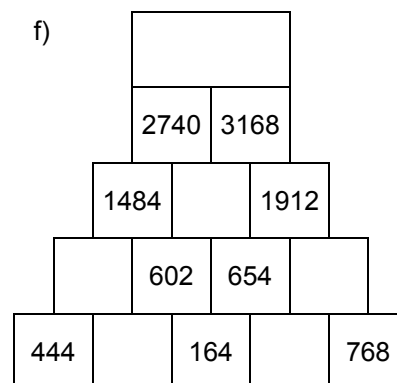
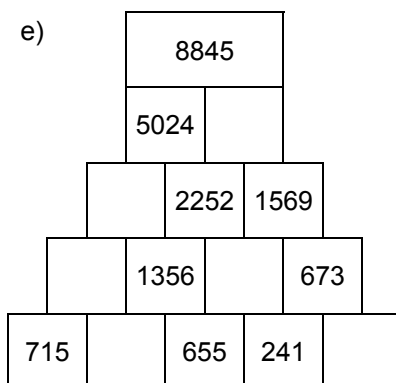
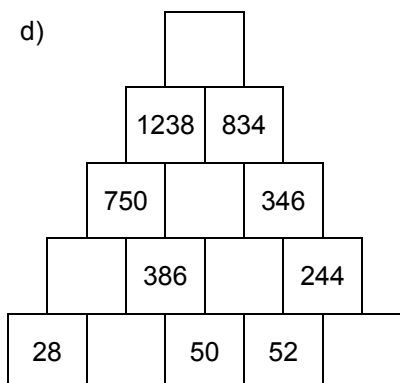
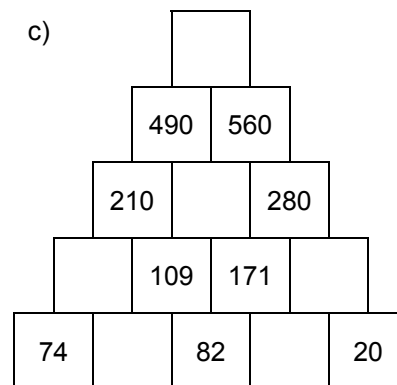
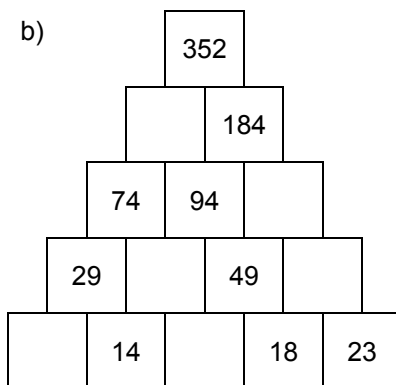
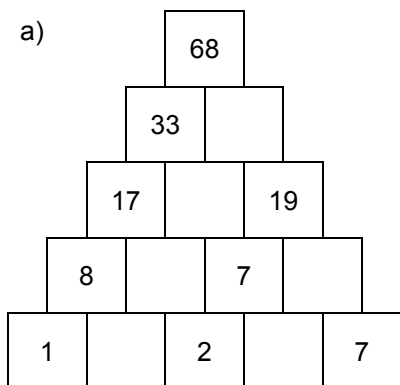
Bist du ein großer Rechenmeister?

Name: \_\_\_\_\_, 4a

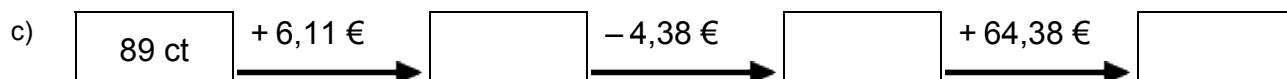
Datum: \_\_\_\_\_



## 1. Rechenpyramiden: Immer 2 Steine werden nach oben zum Mittelstein addiert. Ergänze die fehlenden Zahlen!



## 2. Meter, Kilometer, Gramm, Kilogramm, Euro: Ergänze die fehlenden Werte!



## 3. Einmaleins: Ergänze die fehlenden Werte!

a)

	• 3	• 5	• 2	• 6	• 7	• 4
8						
4						
3						
2						
5						
6						
7						

b)

	• 5	• 6	• 4	• 3	• 2	• 7
14						
16						
15						
11						
12						
17						
13						