

Rechenmeister, Blatt 11

Bist du ein großer Rechenmeister?

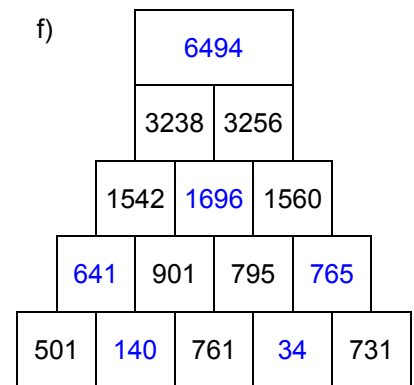
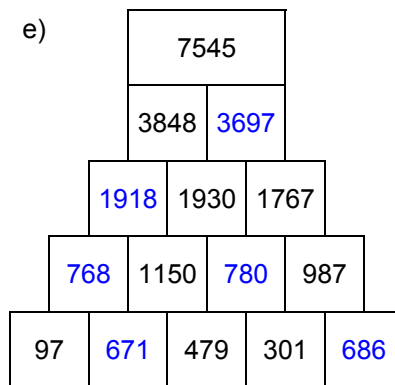
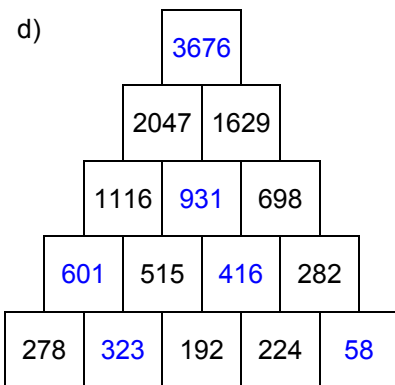
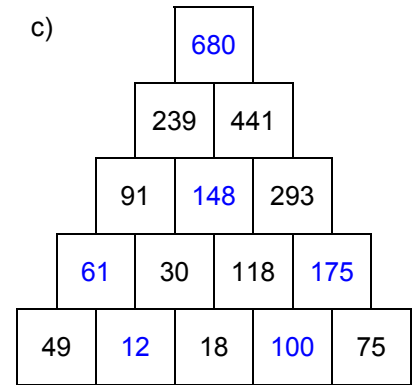
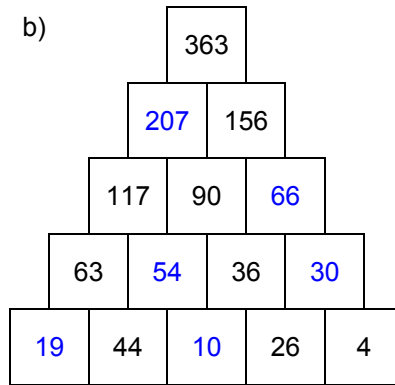
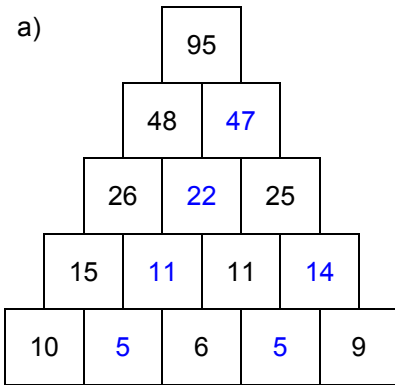
Name: _____, 4a

Datum: _____

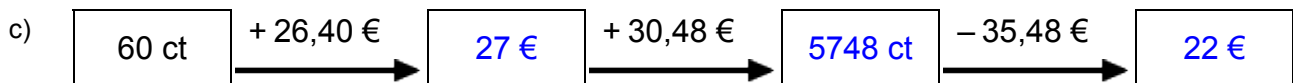
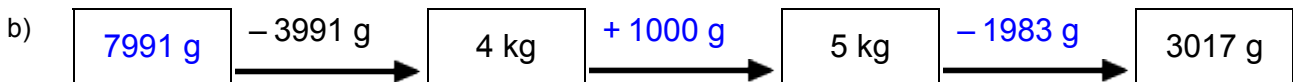
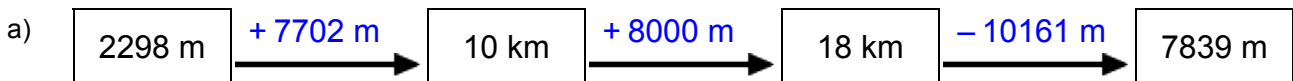
LÖSUNGEN



1. Rechenpyramiden: Immer 2 Steine werden nach oben zum Mittelstein addiert. Ergänze die fehlenden Zahlen!



2. Meter, Kilometer, Gramm, Kilogramm, Euro: Ergänze die fehlenden Werte!



3. Einmaleins: Ergänze die fehlenden Werte!

a)

	• 7	• 4	• 5	• 2	• 6	• 3
6	42	24	30	12	36	18
7	49	28	35	14	42	21
8	56	32	40	16	48	24
4	28	16	20	8	24	12
5	35	20	25	10	30	15
2	14	8	10	4	12	6
3	21	12	15	6	18	9

b)

	• 5	• 4	• 2	• 6	• 7	• 3
12	60	48	24	72	84	36
15	75	60	30	90	105	45
11	55	44	22	66	77	33
13	65	52	26	78	91	39
14	70	56	28	84	98	42
17	85	68	34	102	119	51
16	80	64	32	96	112	48

Rechenmeister, Blatt 12

Bist du ein großer Rechenmeister?

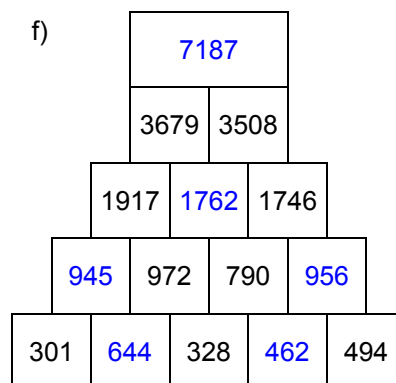
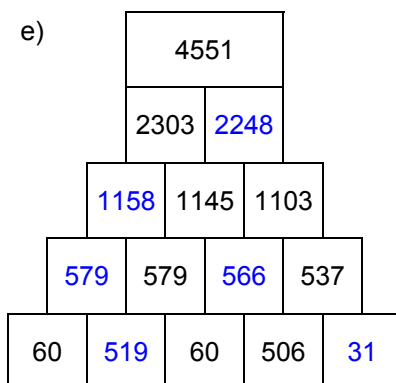
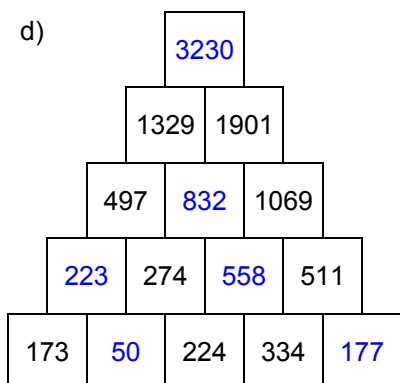
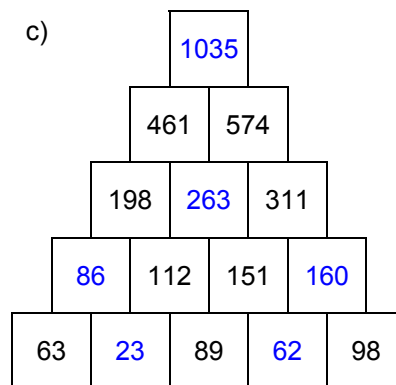
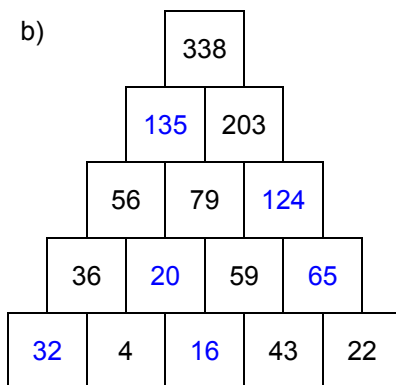
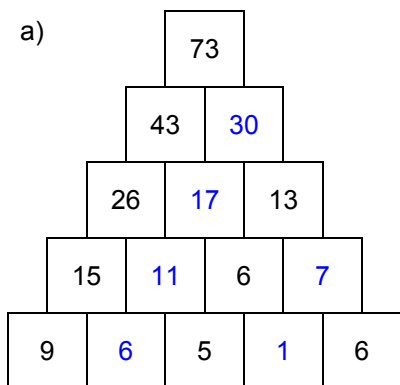
Name: _____, 4a

Datum: _____

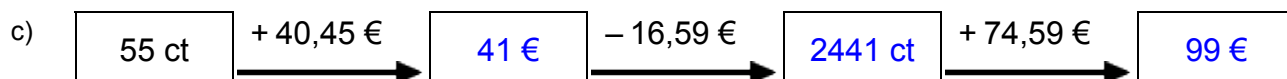
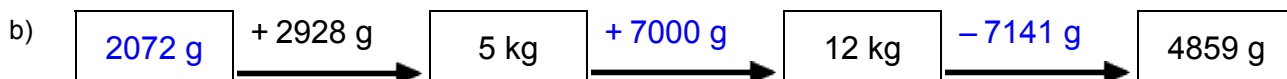
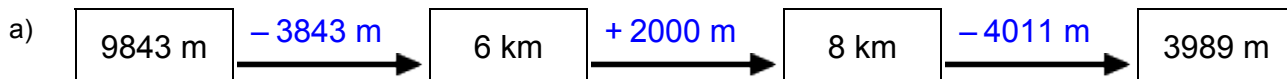
LÖSUNGEN



1. Rechenpyramiden: Immer 2 Steine werden nach oben zum Mittelstein addiert. Ergänze die fehlenden Zahlen!



2. Meter, Kilometer, Gramm, Kilogramm, Euro: Ergänze die fehlenden Werte!



3. Einmaleins: Ergänze die fehlenden Werte!

a)

	• 2	• 7	• 5	• 3	• 6	• 4
8	16	56	40	24	48	32
6	12	42	30	18	36	24
2	4	14	10	6	12	8
7	14	49	35	21	42	28
5	10	35	25	15	30	20
4	8	28	20	12	24	16
3	6	21	15	9	18	12

b)

	• 4	• 7	• 5	• 3	• 6	• 2
12	48	84	60	36	72	24
16	64	112	80	48	96	32
17	68	119	85	51	102	34
15	60	105	75	45	90	30
13	52	91	65	39	78	26
14	56	98	70	42	84	28
11	44	77	55	33	66	22