

Rechenmeister, Blatt 13

Bist du ein großer Rechenmeister?

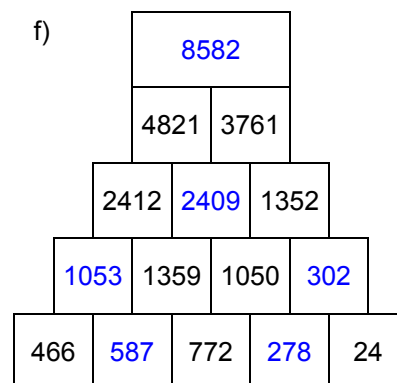
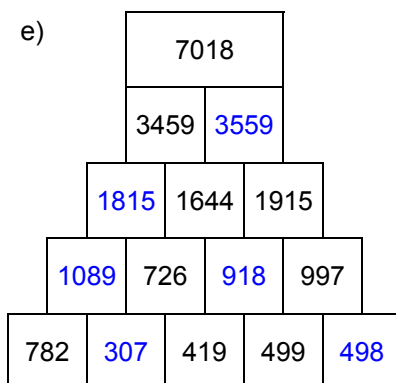
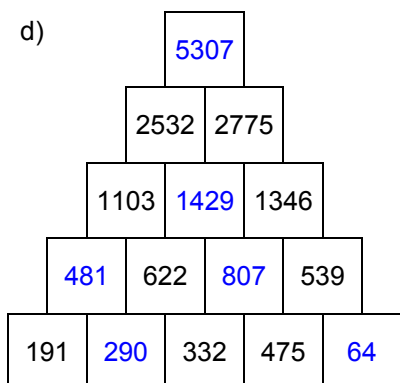
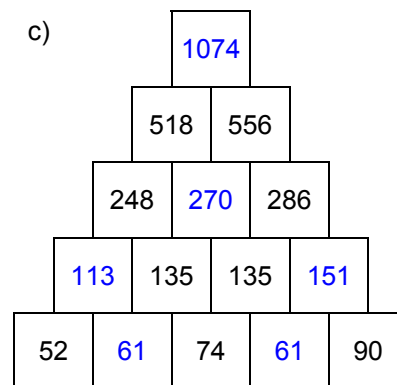
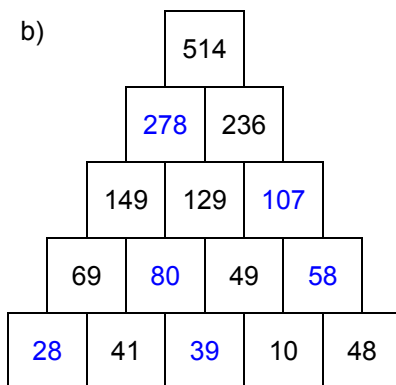
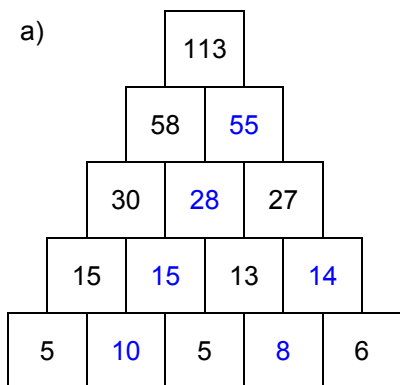
Name: _____, 4a

Datum: _____

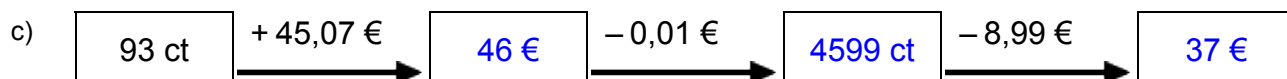
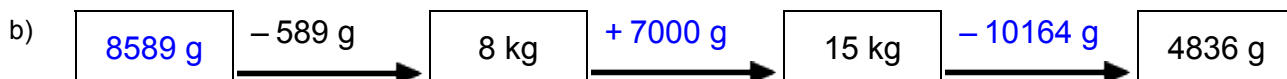
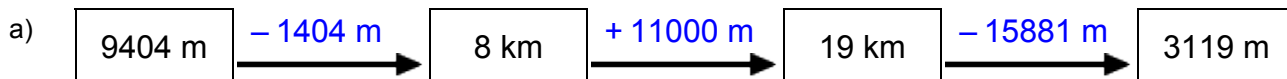
LÖSUNGEN



1. Rechenpyramiden: Immer 2 Steine werden nach oben zum Mittelstein addiert. Ergänze die fehlenden Zahlen!



2. Meter, Kilometer, Gramm, Kilogramm, Euro: Ergänze die fehlenden Werte!



3. Einmaleins: Ergänze die fehlenden Werte!

a)

	• 6	• 7	• 4	• 2	• 3	• 5
5	30	35	20	10	15	25
3	18	21	12	6	9	15
8	48	56	32	16	24	40
2	12	14	8	4	6	10
6	36	42	24	12	18	30
4	24	28	16	8	12	20
7	42	49	28	14	21	35

b)

	• 5	• 2	• 6	• 7	• 3	• 4
17	85	34	102	119	51	68
12	60	24	72	84	36	48
11	55	22	66	77	33	44
14	70	28	84	98	42	56
16	80	32	96	112	48	64
15	75	30	90	105	45	60
13	65	26	78	91	39	52

Rechenmeister, Blatt 14

Bist du ein großer Rechenmeister?

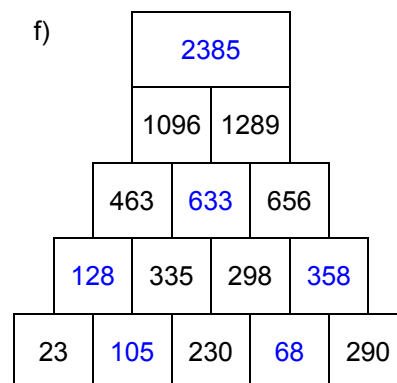
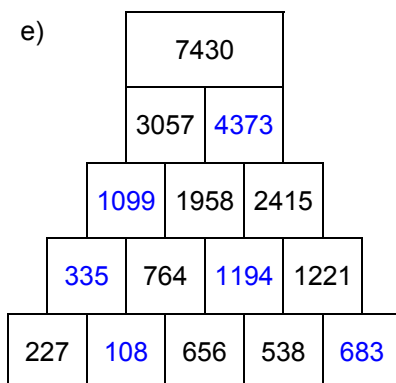
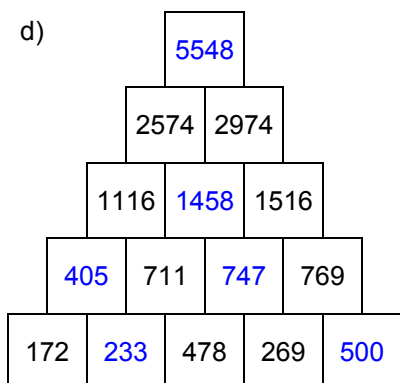
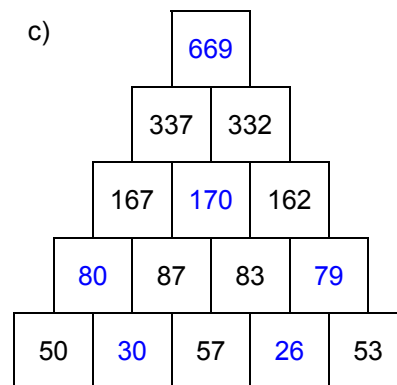
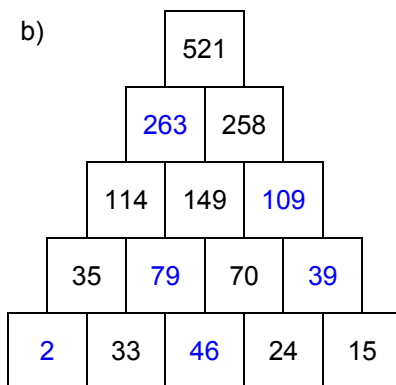
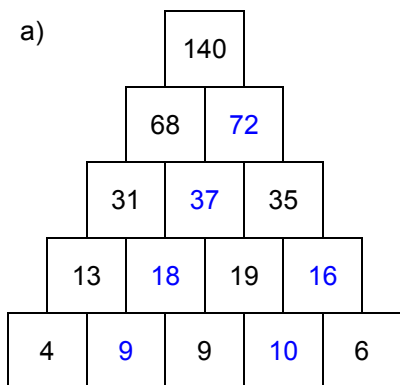
Name: _____, 4a

Datum: _____

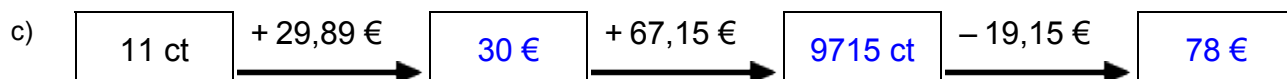
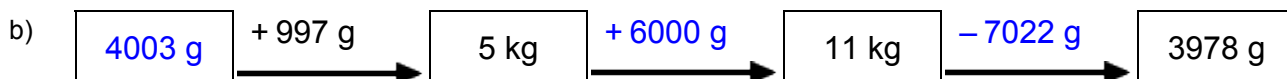
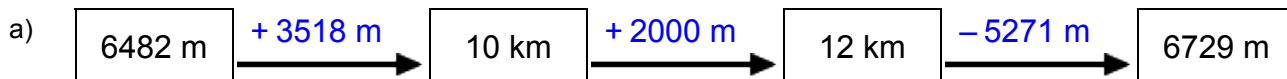
LÖSUNGEN



1. Rechenpyramiden: Immer 2 Steine werden nach oben zum Mittelstein addiert. Ergänze die fehlenden Zahlen!



2. Meter, Kilometer, Gramm, Kilogramm, Euro: Ergänze die fehlenden Werte!



3. Einmaleins: Ergänze die fehlenden Werte!

a)

	• 5	• 2	• 3	• 4	• 7	• 6
3	15	6	9	12	21	18
8	40	16	24	32	56	48
2	10	4	6	8	14	12
6	30	12	18	24	42	36
7	35	14	21	28	49	42
4	20	8	12	16	28	24
5	25	10	15	20	35	30

b)

	• 3	• 2	• 6	• 5	• 4	• 7
11	33	22	66	55	44	77
14	42	28	84	70	56	98
17	51	34	102	85	68	119
15	45	30	90	75	60	105
13	39	26	78	65	52	91
16	48	32	96	80	64	112
12	36	24	72	60	48	84