

Rechenmeister, Blatt 17

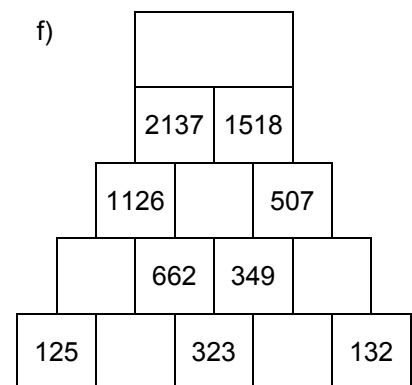
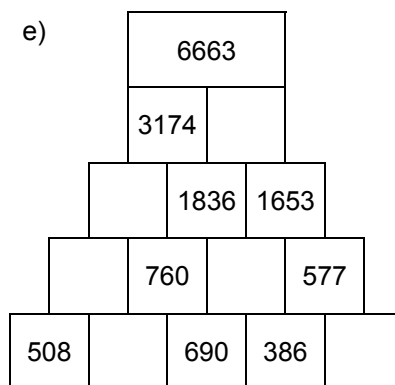
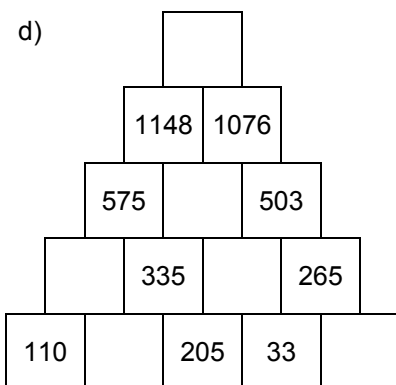
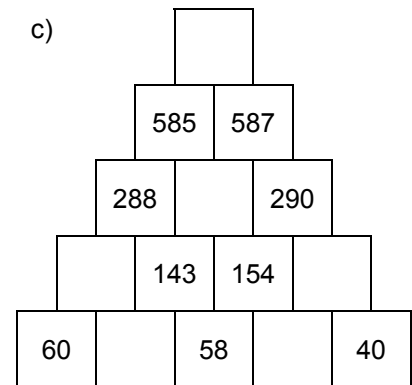
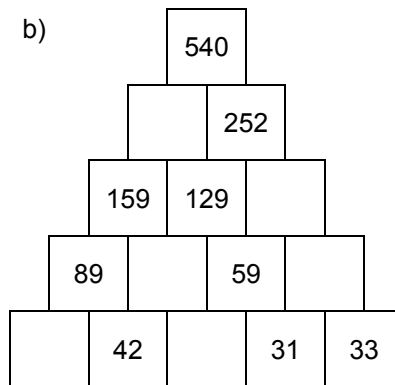
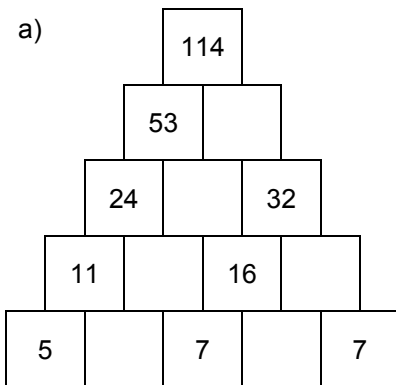
Bist du ein großer Rechenmeister?

Name: _____, 4a

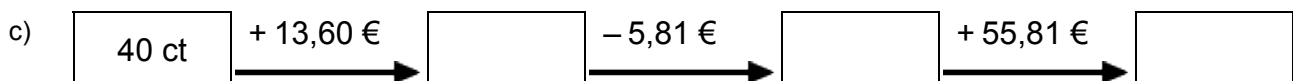
Datum: _____



1. Rechenpyramiden: Immer 2 Steine werden nach oben zum Mittelstein addiert. Ergänze die fehlenden Zahlen!



2. Meter, Kilometer, Gramm, Kilogramm, Euro: Ergänze die fehlenden Werte!



3. Einmaleins: Ergänze die fehlenden Werte!

a)

	• 3	• 4	• 7	• 2	• 5	• 6
8						
5						
7						
3						
4						
2						
6						

b)

	• 4	• 7	• 2	• 5	• 6	• 3
12						
16						
14						
17						
15						
11						
13						

Rechenmeister, Blatt 18

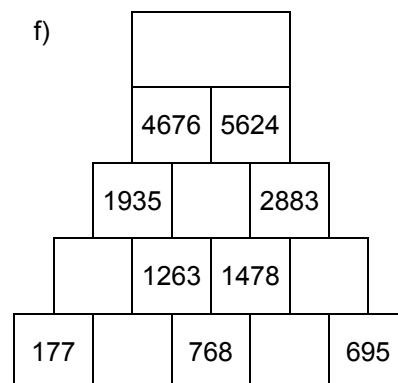
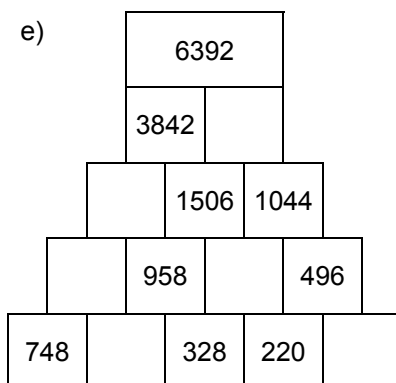
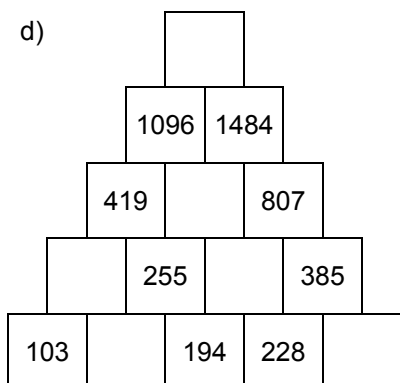
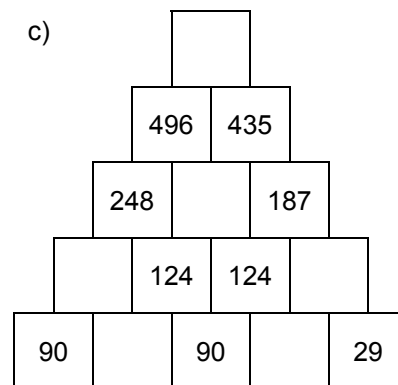
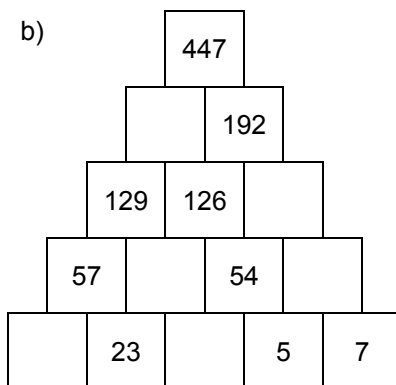
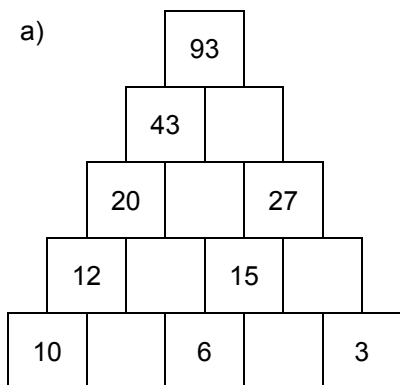
Bist du ein großer Rechenmeister?

Name: _____, 4a

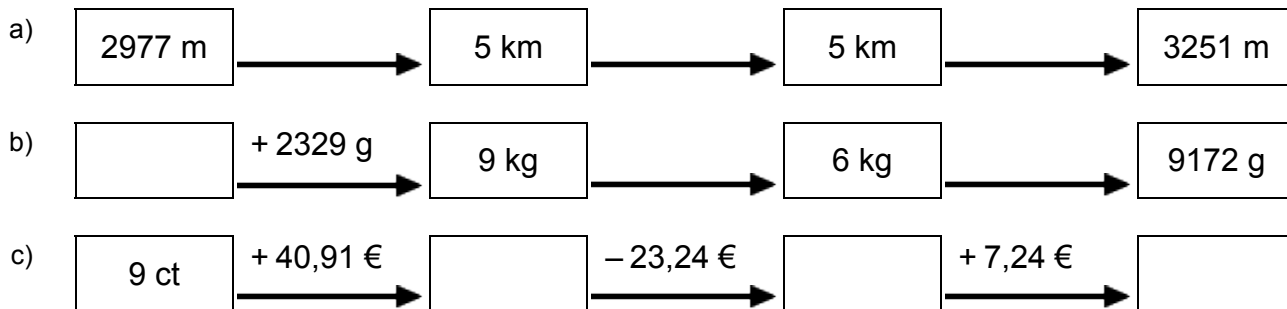
Datum: _____



1. Rechenpyramiden: Immer 2 Steine werden nach oben zum Mittelstein addiert. Ergänze die fehlenden Zahlen!



2. Meter, Kilometer, Gramm, Kilogramm, Euro: Ergänze die fehlenden Werte!



3. Einmaleins: Ergänze die fehlenden Werte!

a)

	• 6	• 2	• 7	• 3	• 5	• 4
3						
2						
6						
5						
8						
7						
4						

b)

	• 2	• 3	• 5	• 7	• 4	• 6
12						
14						
16						
15						
17						
13						
11						