

Rechenmeister, Blatt 19

Bist du ein großer Rechenmeister?

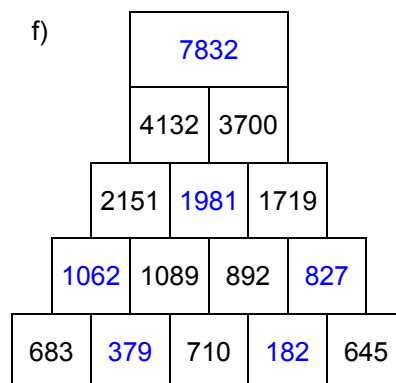
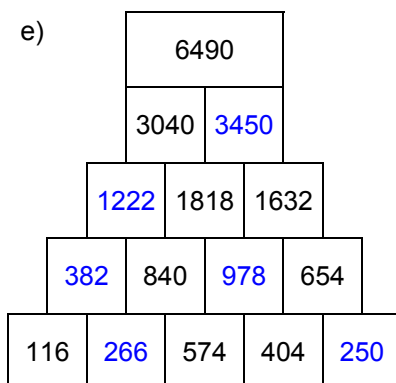
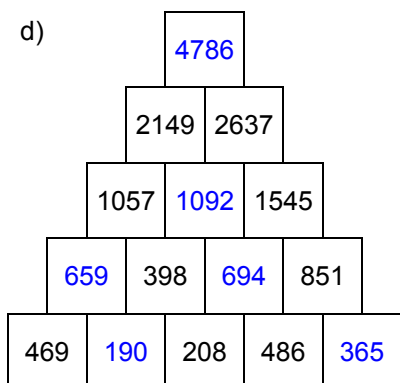
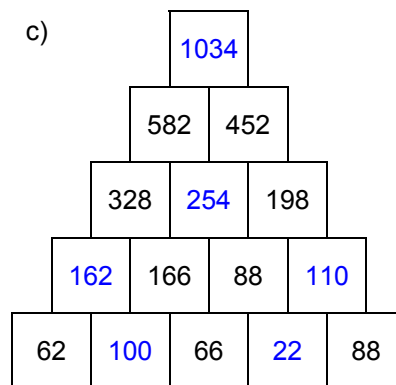
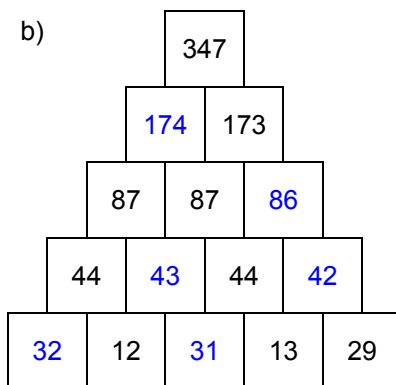
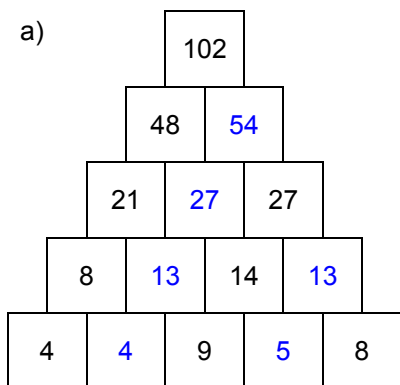
Name: _____, 4a

Datum: _____

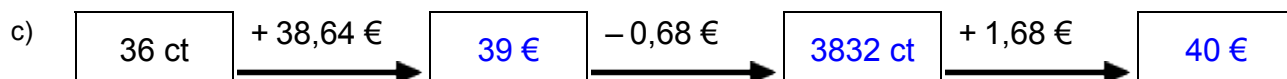
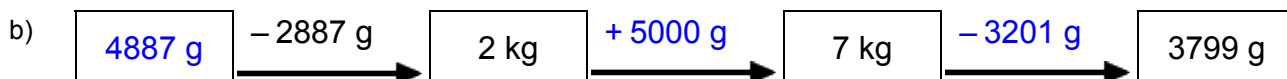
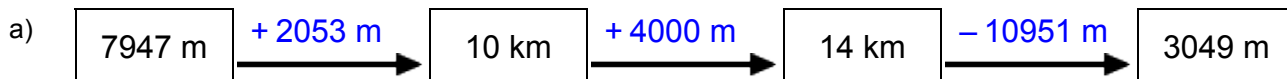
LÖSUNGEN



1. Rechenpyramiden: Immer 2 Steine werden nach oben zum Mittelstein addiert. Ergänze die fehlenden Zahlen!



2. Meter, Kilometer, Gramm, Kilogramm, Euro: Ergänze die fehlenden Werte!



3. Einmaleins: Ergänze die fehlenden Werte!

a)

	• 7	• 4	• 2	• 5	• 6	• 3
5	35	20	10	25	30	15
7	49	28	14	35	42	21
2	14	8	4	10	12	6
3	21	12	6	15	18	9
4	28	16	8	20	24	12
8	56	32	16	40	48	24
6	42	24	12	30	36	18

b)

	• 6	• 4	• 3	• 5	• 2	• 7
14	84	56	42	70	28	98
11	66	44	33	55	22	77
15	90	60	45	75	30	105
17	102	68	51	85	34	119
12	72	48	36	60	24	84
13	78	52	39	65	26	91
16	96	64	48	80	32	112

Rechenmeister, Blatt 20

Bist du ein großer Rechenmeister?

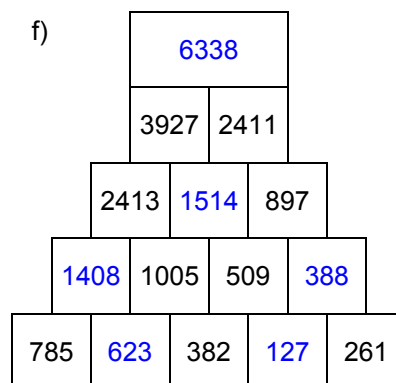
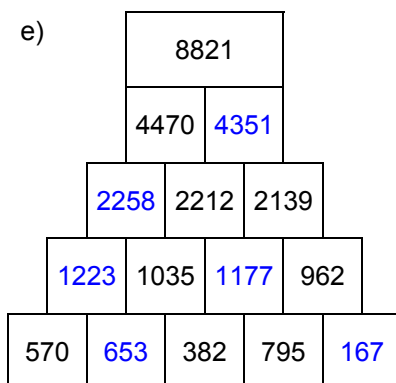
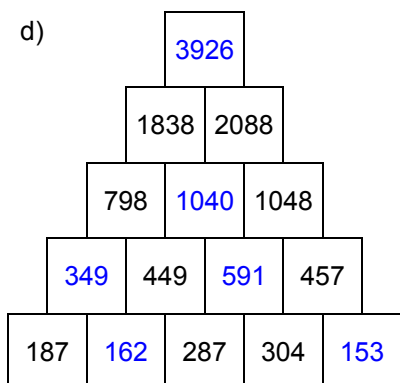
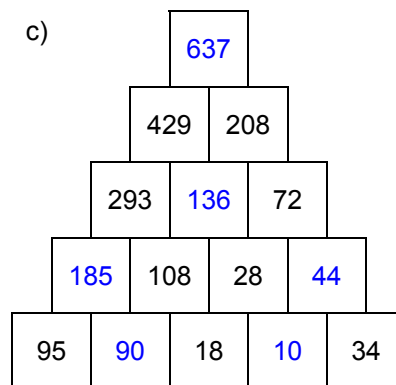
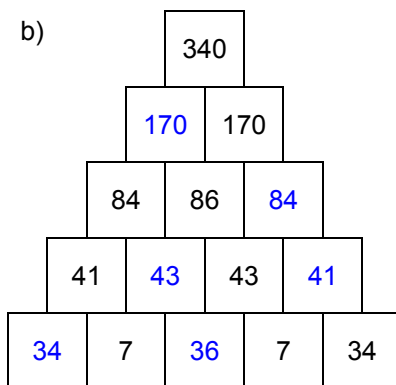
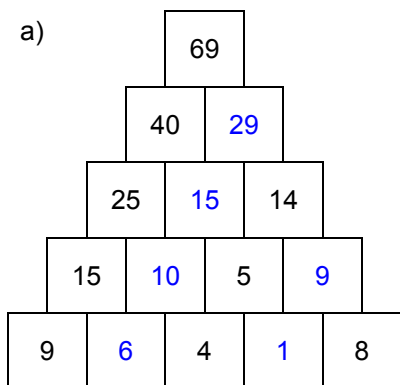
Name: _____, 4a

Datum: _____

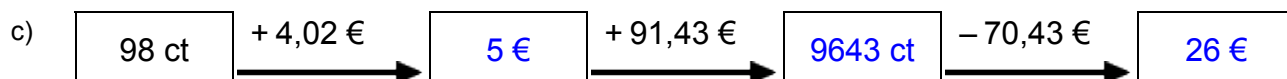
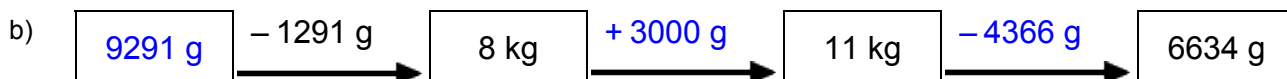
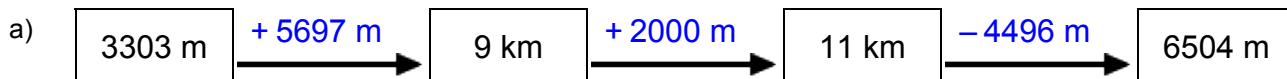
LÖSUNGEN



1. Rechenpyramiden: Immer 2 Steine werden nach oben zum Mittelstein addiert. Ergänze die fehlenden Zahlen!



2. Meter, Kilometer, Gramm, Kilogramm, Euro: Ergänze die fehlenden Werte!



3. Einmaleins: Ergänze die fehlenden Werte!

a)

	• 2	• 7	• 4	• 5	• 3	• 6
3	6	21	12	15	9	18
5	10	35	20	25	15	30
4	8	28	16	20	12	24
8	16	56	32	40	24	48
7	14	49	28	35	21	42
2	4	14	8	10	6	12
6	12	42	24	30	18	36

b)

	• 6	• 7	• 2	• 3	• 4	• 5
16	96	112	32	48	64	80
12	72	84	24	36	48	60
14	84	98	28	42	56	70
13	78	91	26	39	52	65
11	66	77	22	33	44	55
15	90	105	30	45	60	75
17	102	119	34	51	68	85