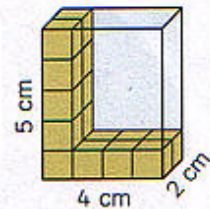
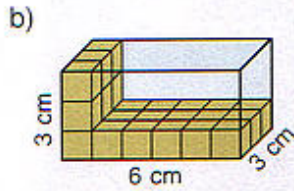
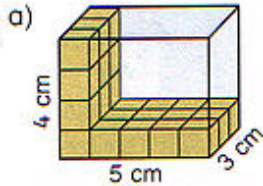
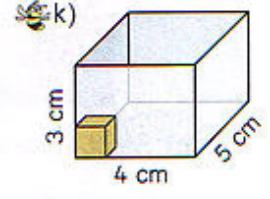
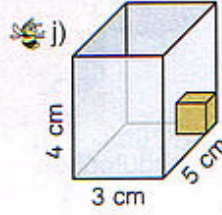
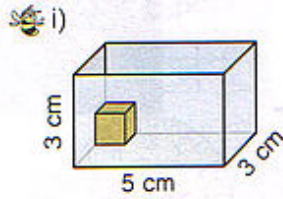
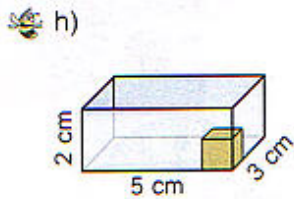
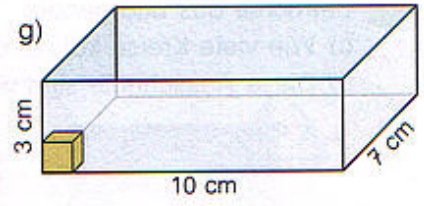

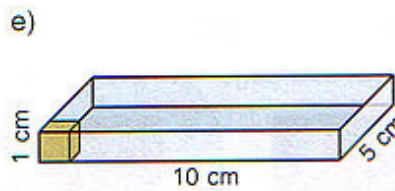
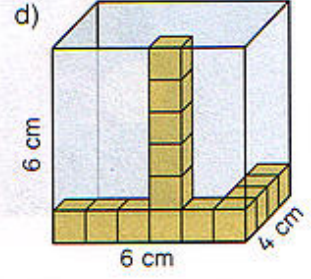
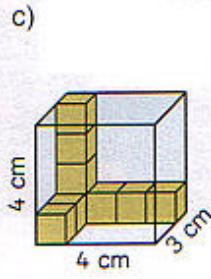
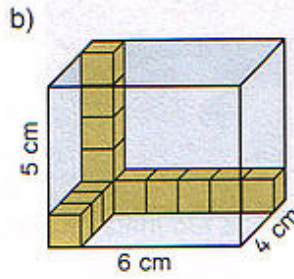
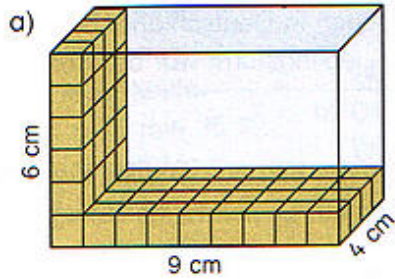


**5** In welchen Quader passen mehr Zentimeterwürfel?  
Baut nach. Rechnet den Rauminhalt aus. Vergleicht.



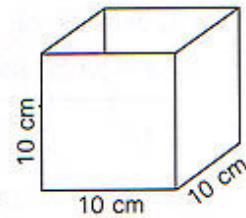
**6** Berechne den Rauminhalt dieser Quader. Wie viele Zentimeterwürfel passen hinein?



**7** a) Wie viele Zentimeterwürfel passen in diesen Würfel?

Ein Zentimeterwürfel hat den Rauminhalt 1 ml.

b) Wie viel Milliliter passen in diesen Würfel? Wie viel Liter sind es?



**8** Wie viel Liter Wasser passen in diese Aquarien?

